


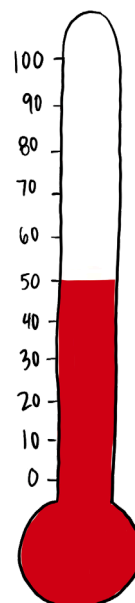
# Miss Mingo's Subtraction Math

Name \_\_\_\_\_

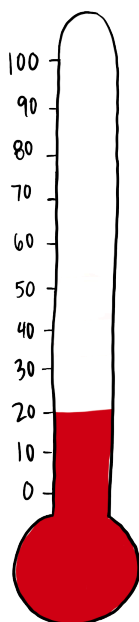
Directions: Look at Miss Mingo's thermometers and determine how many more degrees would make 100.



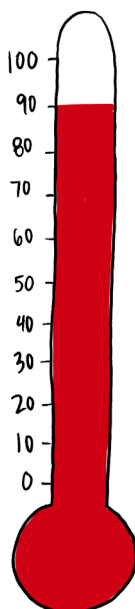
1. \_\_\_\_\_ more degrees



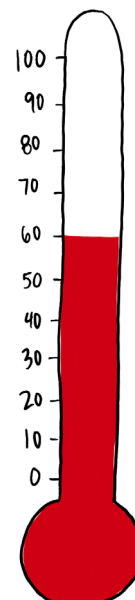
2. \_\_\_\_\_ more degrees



3. \_\_\_\_\_ more degrees



4. \_\_\_\_\_ more degrees



5. \_\_\_\_\_ more degrees